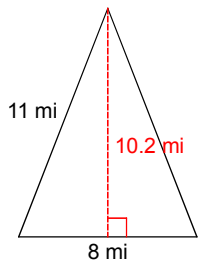
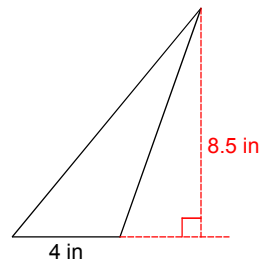


Find the area of each.

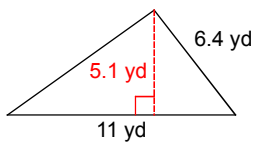
1)



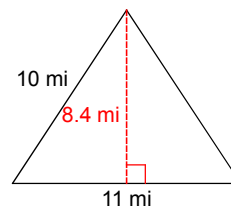
2)



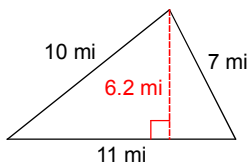
3)



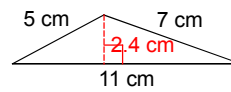
4)



5)



6)



Answers to 17-12-04

1) 40.8 mi^2
5) 34.1 mi^2

2) 17 in^2
6) 13.2 cm^2

3) 28.05 yd^2

4) 46.2 mi^2