

14-01-21-T8

Sketch the graph of each line.

1) $y = x + 1$

2) $y = 4x$

3) $y = -\frac{5}{2}x + 2$

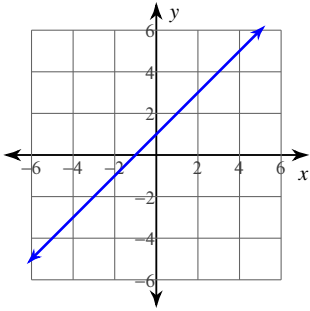
4) $y = 3x + 5$

5) $0 = -5y - 25 - 4x$

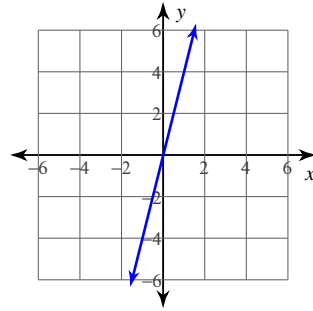
6) $-3x + 2y = -6$

Answers to 14-01-21-T8

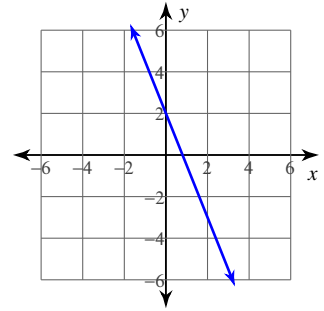
1)



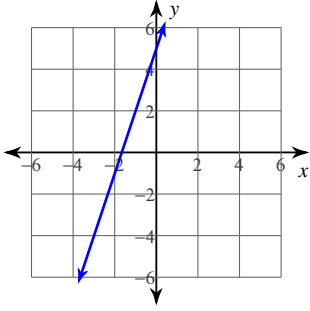
2)



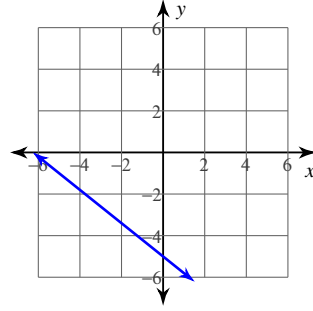
3)



4)



5)



6)

