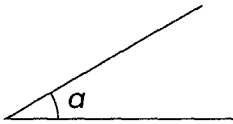


EXERCISE
27

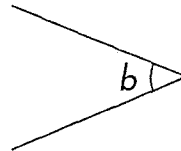
Angles

A. Estimate and then measure the marked angles.

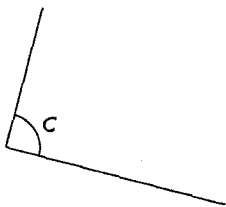
(1)



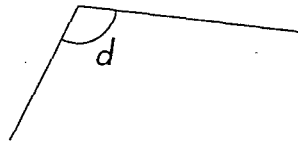
(2)



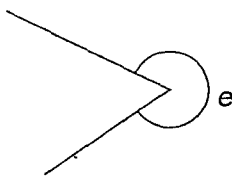
(3)



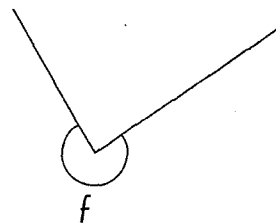
(4)



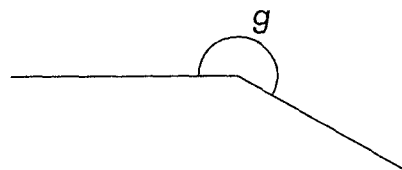
(5)



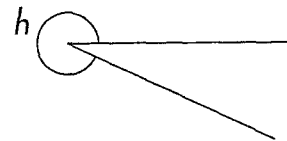
(6)



(7)

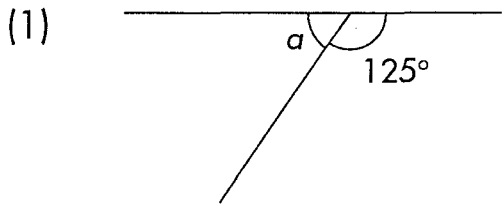


(8)

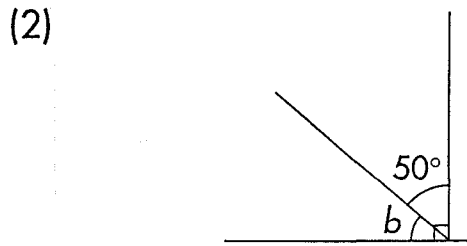


	(1)	(2)	(3)	(4)	(5)	(6)	(7)	(8)
Angles	<i>a</i>	<i>b</i>	<i>c</i>	<i>d</i>	<i>e</i>	<i>f</i>	<i>g</i>	<i>h</i>
Estimate								
Measure								

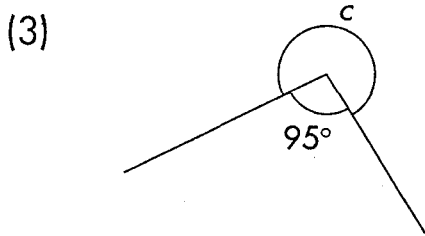
B. The following figures are not drawn to scale. Find the unknown angles.



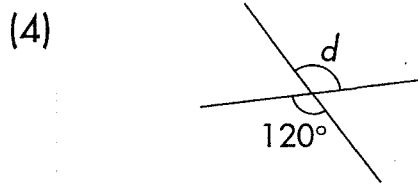
$\angle a =$



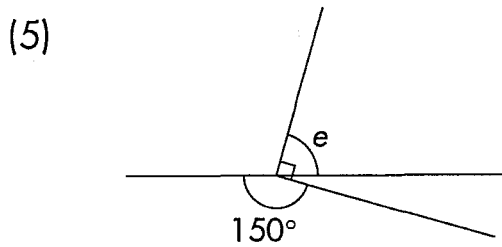
$\angle b =$



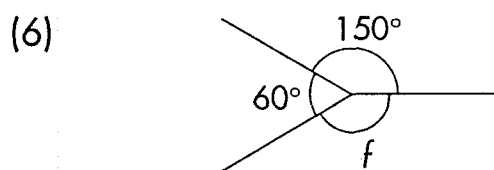
$\angle c =$



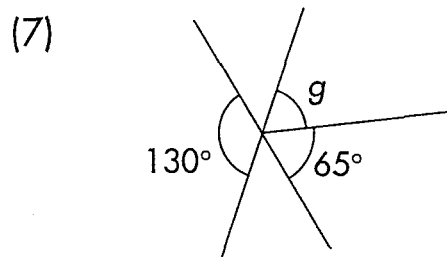
$\angle d =$



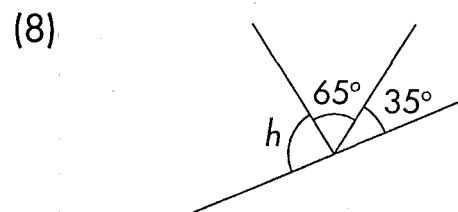
$\angle e =$



$\angle f =$



$\angle g =$



$\angle h =$

ANSWERS

A	(1)	30°	(2)	45°	(3)	90°	(4)	110°
	(5)	300°	(6)	275°	(7)	210°	(8)	335°
B	(1)	55°	(2)	40°	(3)	265°	(4)	120°
	(5)	60°	(6)	150°	(7)	65°	(8)	80°

Exercise 27

A	(1)	30°	(2)	45°	(3)	90°	(4)	110°
	(5)	300°	(6)	275°	(7)	210°	(8)	335°
B	(1)	55°	(2)	40°	(3)	265°	(4)	120°
	(5)	60°	(6)	150°	(7)	65°	(8)	80°