


Name \_\_\_\_\_

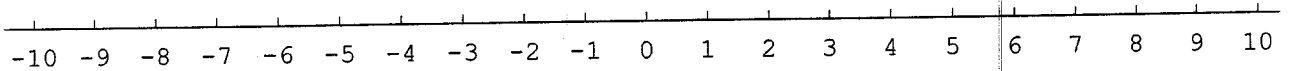
**[09-11-09-T-8]**  
*Graph inequalities*

■ **A. Graph the following. Answer on this sheet.**


[1] All numbers greater than or equal to  $-3$ .



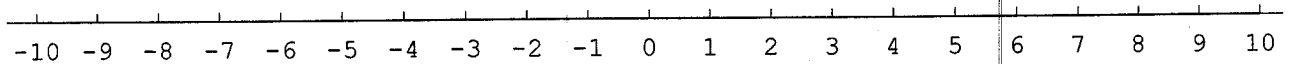
[2] All numbers no less than 1.




[3]  $x$  is at least  $-5$ .




[4] All numbers between  $-4$  and  $7$ .



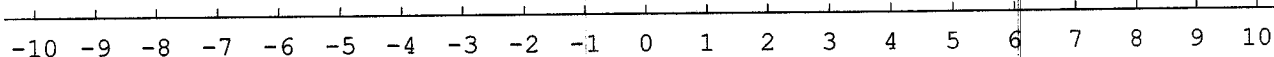
[5]  $x$  is greater than 2 and no greater than 9



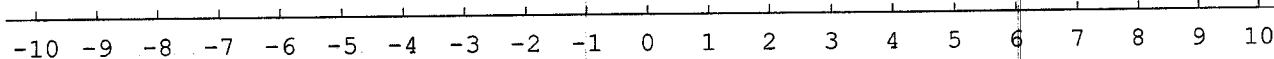
[6]  $2 < x \leq 9$




[8]  $x$  is to the left of 2.



[9]  $x$  is positive



[10]  $x$  is non-negative

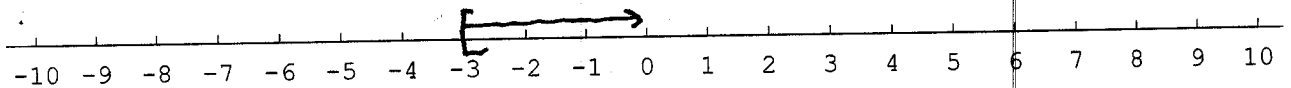


Name Answers


[09-11-09-T-8]  
Graph inequalities

■ A. Graph the following. Answer on this sheet.

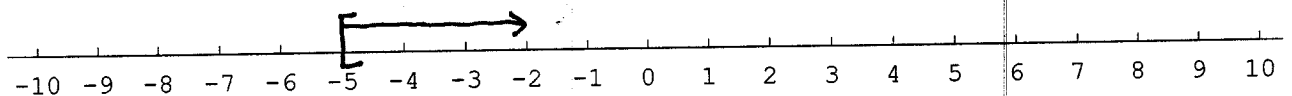
[1] All numbers greater than or equal to  $-3$ .



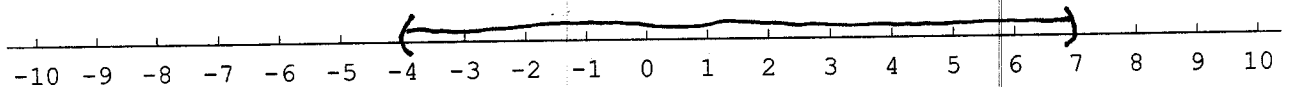
[2] All numbers no less than 1.



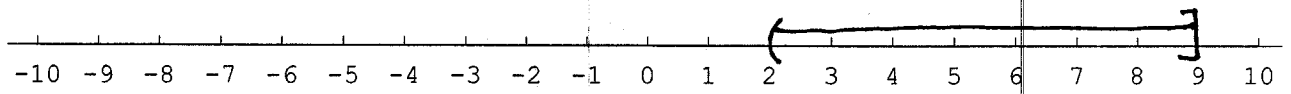
[3]  $x$  is at least  $-5$ .



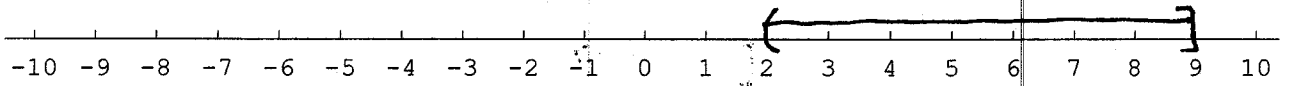
[4] All numbers between  $-4$  and  $7$ .




[5]  $x$  is greater than 2 and no greater than 9



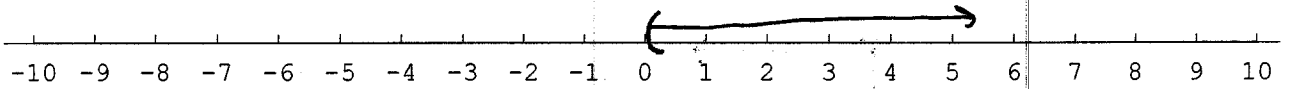
[6]  $2 < x \leq 9$



[8]  $x$  is to the left of 2.



[9]  $x$  is positive



[10]  $x$  is non-negative

