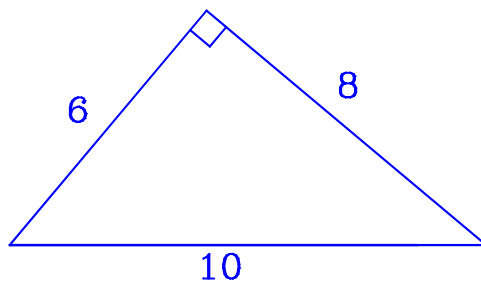


Math 5
Area Triangle

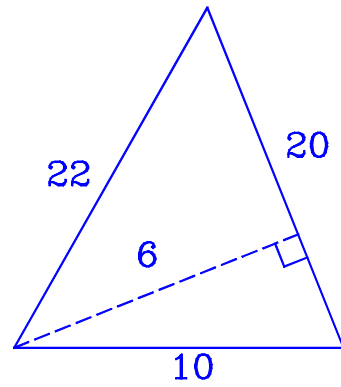
- Drawings are not to scale. Dashed lines are not part of the triangle.
- For full credit, answers must include correct units.
- A. In each figure, state the base and the height of the triangle shown. All units are cm. (10 points each)

[1] Height = _____ , Base = _____ .

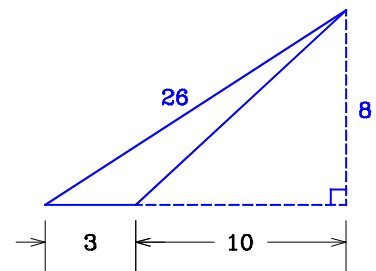


[2] Height = _____ , Base = _____ .

[3] Height = _____ , Base = _____ .

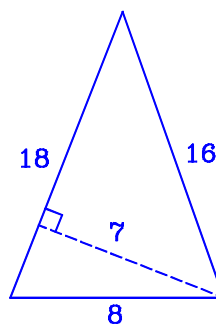


[4] Height = _____ , Base = _____ .

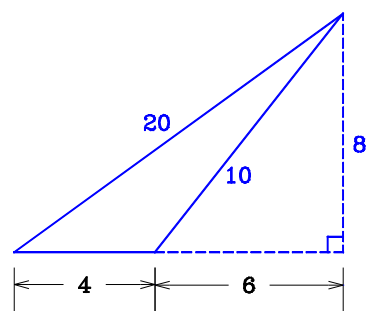


■ In the following questions, find the area of the triangle.

[5]



[6]



[7]

