

Name \_\_\_\_\_ raw scaled percent

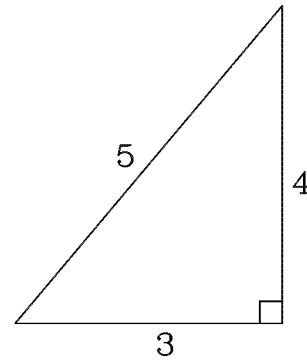
---

**Math 5 Trimester 2 Quiz 3 (20 Points)**  
*Area Triangle*

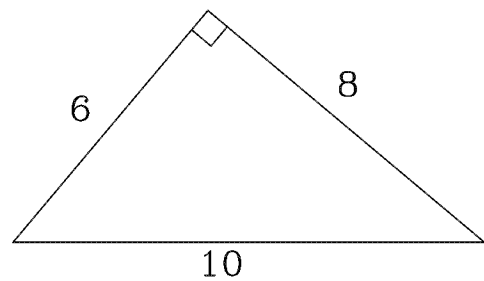
---

- Figures are not drawn to scale. All units are cm. Answers must include units.
- A. In each figure, state the base and the height of the triangle shown. (2 points each)

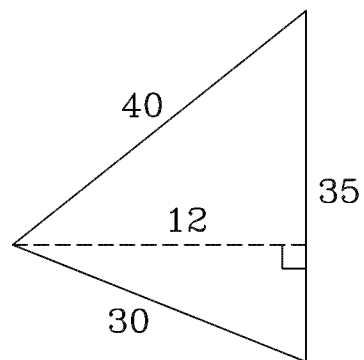
[1] Height = \_\_\_\_\_ , Base = \_\_\_\_\_ .



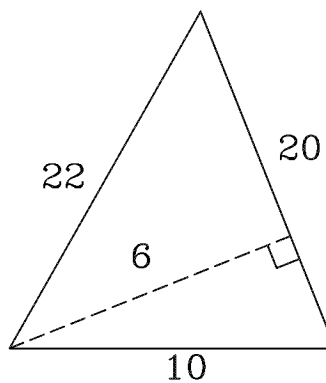
[2] Height = \_\_\_\_\_ , Base = \_\_\_\_\_ .



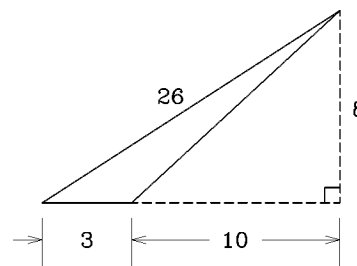
[3] Height = \_\_\_\_\_ , Base = \_\_\_\_\_ .



[4] Height = \_\_\_\_\_ , Base = \_\_\_\_\_ .

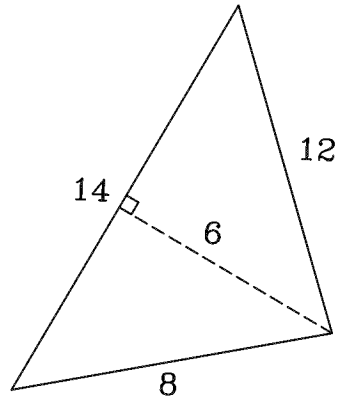


[5] Height = \_\_\_\_\_ , Base = \_\_\_\_\_ .



■ B. Find the area of each triangle. Answers must include units. (5 points each)

[1] Find the area of the triangle



---

[2] Find the area of the triangle

